

Transition Pack for A Level Chemistry

Get ready for A-level!

**A guide to help you get ready for A-level Chemistry,
including everything from topic guides to days out
and online learning courses.**

Commissioned by The PiXL Club Ltd. April 2018

© Copyright The PiXL Club Ltd, 2018

Please note: these resources are non-board specific. Please direct your students to the specifics of where this knowledge and skills most apply.

This resource is strictly for the use of member schools for as long as they remain members of The PiXL Club. It may not be copied, sold nor transferred to a third party or used by the school after membership ceases. Until such time it may be freely used within the member school.

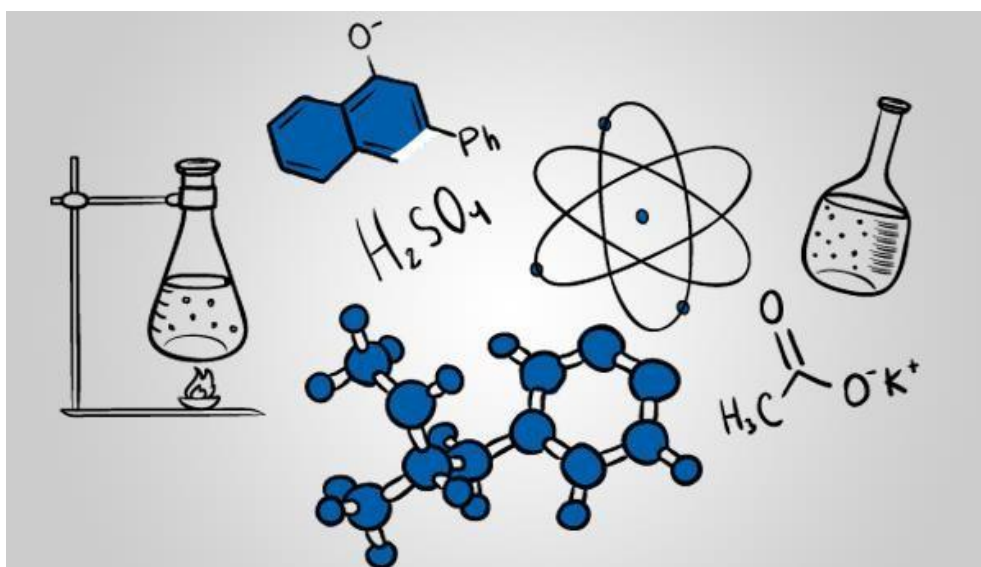
All opinions and contributions are those of the authors. The contents of this resource are not connected with nor endorsed by any other company, organisation or institution.

www.pixl.org.uk

The PiXL Club Ltd, Company number 07321607

So you are considering A level Chemistry?

This pack contains a programme of activities and resources to prepare you to start A level in Chemistry in September. It is aimed to be used after you complete your GCSE, throughout the remainder of the summer term and over the summer holidays to ensure you are ready to start your course in September.



<https://www.my-mooc.com/en/mooc/chemistry1/>

The Sunday Times bestseller

PERIODIC TALES

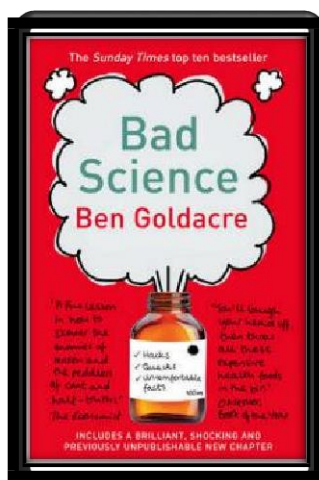
Hugh Aldersey-Williams

THE CURIOUS LIVES OF THE ELEMENTS



"Intrinsically engaging, continually makes one sit up in surprise"
Sunday Times

This book covers the chemical elements, where they come from and how they are used. There are loads of fascinating insights into uses for chemicals you would have never even thought about.


The title says it all really,
lots of interesting stuff
about the things around
your home!



Here Ben Goldacre takes apart anyone who published bad / misleading or dodgy science – this book will make you think about everything the advertising industry tries to sell you by making it sound ‘sciencey’.




If you struggle with the calculations side of chemistry, this is the book for you. Covers all the possible calculations you are ever likely to come across. Brought to you by the same guy who wrote the excellent chemguide.co.uk website.



© Copyright The PiXL Club Ltd, 2018

Movie Recommendations

Everyone loves a good story and everyone loves some great science. Here are some of the picks of the best films based on real life scientists and discoveries. You won't find Jurassic Park on this list! We've looked back over the last 50 years to give you our top 5 films you might not have seen before. Great watching for a rainy day.



The Human Experiment (2013)

A documentary that explores chemicals found in everyday household products.


An Inconvenient Truth (2006)

Al Gore, former presidential candidate campaigns to raise public awareness of the dangers of global warming and calls for immediate action to curb its destructive effects on the environment. (See also: An Inconvenient Sequel, 2017)





A Civil Action (1998)

A tenacious lawyer takes on a case involving a major company responsible for causing several people to be diagnosed with leukemia due to the town's water supply being contaminated, at the risk of bankrupting his firm and career.



Erin Brokovich (2000)

Based on a true story. An unemployed single mother becomes a legal assistant and almost single-handedly brings down a California power company accused of polluting a city's water supply.



The Insider (1999)

A research chemist comes under personal and professional attack when he decides to appear in a "60 Minutes" expose on Big Tobacco.

Movie Recommendations

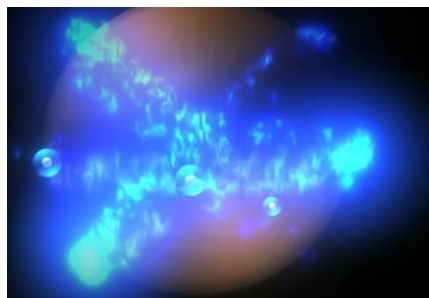
If you have 30 minutes to spare, here are some great presentations (and free!) from world leading scientists and researchers on a variety of topics. They provide some interesting answers and ask some thought-provoking questions. Use the link or scan the QR code to view:

Play with Smart Materials

Available at :

https://www.ted.com/talks/catarina_mota_play_with_smart_materials

Ink that conducts electricity; a window that turns from clear to opaque at the flip of a switch; a jelly that makes music. All this stuff exists, it's time to play with it. A tour of surprising and cool new materials.



Just how small is an atom?

Available at :

https://www.ted.com/talks/just_how_small_is_an_atom

Just how small are atoms? Really, really, really small. This fast-paced animation from TED-Ed uses metaphors (imagine a blueberry the size of a football stadium!) to give a visceral sense of just how small atoms are.

Battling Bad Science

Available at :

https://www.ted.com/talks/ben_goldacre_battling_bad_science#t-44279

Every day there are news reports of new health advice, but how can you know if they're right? Doctor and epidemiologist Ben Goldacre shows us, at high speed, the ways evidence can be distorted, from the blindingly obvious nutrition claims to the very subtle tricks of the pharmaceutical industry.



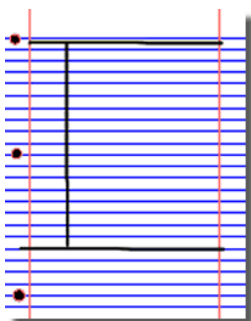
How Spectroscopy Could Reveal Alien Life

Available at :

https://www.ted.com/talks/garik_israelian_what_s_inside_a_star

Garik Israelian is a spectroscopist, studying the spectrum emitted by a star to figure out what it's made of and how it might behave. It's a rare and accessible look at this discipline, which may be coming close to finding a planet friendly to life.

1. Divide your page into three sections like this



A blank lined paper template. At the top, there are two green labels: 'Course Name' and 'Date'. Below these labels is a large rectangular box defined by a black border, intended for writing notes. The background of the paper is white with horizontal blue lines. There are also two vertical red lines on the left side of the page, one near the left edge and one near the right edge of the note box.

The diagram shows a table with two columns: 'Course Name' and 'Date'. The table is titled 'Notes' in green. The 'Course Name' column contains the text 'P', 'K', 'e', 'n', 'y', 's' stacked vertically. The 'Date' column is empty. The table is drawn with a black border and a vertical line separating the columns. The text is written in a handwritten style.

Course Name	Date
P K e n y s	Notes About Key Points
Summary	

John G. Pridmore
LIFE SCI 931
APRIL 1, 2000

Pterium subventral	Anterodorsal Chelicerae
Chelicerae maxillae	3 pairs → pincer-like appendages (first pair deformed for feeding)
	lingual, labial, vomer, rostr.
Prozona	
Oxistoma	• sensory, feeding, and excretory sagittae
Chelicerae	• phoridontic or chelate • used for reaching • first pair as appendages
Pedipalp	• second pair of appendages • used for grasping feeding, locomotion, reproduction

Thus far, arthropods make up of subphylum chelicerata. Subphylum chelicerata is characterized by two pairs: front antennae and chelicerae. The joints and configurations are different, flexible, and incompressible. The chelicerae is the first appendage and refers to the pincer. The pedipalp is the 2nd pair of appendages, and they are used for sensory purposes, feeding, locomotion, and reproduction.

© Copyright The PiXL Club Ltd, 2018

Research Activities

Aimed at students aged 14-19, Catalyst magazine is packed with interesting articles on cutting-edge science, interviews and new research written by leading academics. It also includes a booklet of teacher's notes, full of ideas and lesson plans to bring the articles to life in the classroom.

For each of the following topics you are going to use the resources to produce one page of Cornell style notes.

Use the links of scan the QR code to take you to the resources.




Topic 1: Using Plastics in the Body

Available at:

<https://www.stem.org.uk/resources/elibrary/resource/382317/using-plastics-body>

This Catalyst article looks at how scientists are learning to use polymers for many medical applications, including implants, bone repairs and reduction in infections.



Topic 2: Catching a Cheat

Available at:

<https://www.stem.org.uk/system/files/elibrary-resources/2017/03/Catching%20a%20cheat.pdf>

This Catalyst article looks at analytical chemists who are involved in many kinds of testing, including drug testing to catch cheats in sport.



Topic 3: Diamond: More than just a gemstone

Available at:

<https://www.stem.org.uk/system/files/elibrary-resources/2017/02/Diamond%20more%20than%20just%20a%20gemstone.pdf>

This Catalyst article looks at diamond and graphite which are allotropes of carbon. Their properties, which depend on the bonding between the carbon atoms, are also examined.



Topic 4: The Bizarre World of High Pressure Chemistry

Chemistry

Available at:

https://www.stem.org.uk/system/files/elibrary-resources/2016/11/Catalyst27_1_the_bizarre_world_of_high_pressure_chemistry.pdf

This Catalyst article investigates high pressure chemistry and discovers that, when put under extreme pressure, the properties of a material may change dramatically.



Topic 5: Microplastics and the Oceans

Available at:

https://www.stem.org.uk/system/files/elibrary-resources/2016/11/Catalyst27_1_microplastics_and_the_oceans.pdf

This Catalyst article looks at microplastics.

Microplastics are tiny particles of polymer used in many products. They have been found to be an environmental pollutant especially in oceans.



Chemistry Topic 1 – Electronic structure, how electrons are arranged around the nucleus

7
Li
lithium
3

© Copyright The PiXL Club Ltd, 2018

Elements that you expect to have a specific oxidation state actually have different states, so for example you would expect chlorine to be -1. It can have many oxidation states: NaClO, in this compound it has an oxidation state of +1

There are a few simple rules to remember:

Metals have a + oxidation state when they react.

Oxygen is 'king', it always has an oxidation state of -2.

Hydrogen has an oxidation state of +1 (except metal hydrides).

The charges in a molecule must cancel.

Examples: Sodium nitrate, NaNO_3

Na +1 3x O^{2-}
+1 -6

sulfate ion, SO_4^{2-}

4x O^{2-} and 2- charges 'showing'
-8 -2

To cancel: N = +5

S = +6

Q2. Work out the oxidation state of the underlined atom in the following:

- a) $\text{Mg}\underline{\text{C}}\text{O}_3$ b) $\underline{\text{S}}\text{O}_3$ c) $\text{Na}\underline{\text{Cl}}\text{O}_3$ d) $\underline{\text{Mn}}\text{O}_2$ e) $\underline{\text{Fe}}_2\text{O}_3$ f) $\underline{\text{V}}_2\text{O}_5$
g) $\text{K}\underline{\text{Mn}}\text{O}_4$ h) $\underline{\text{Cr}}_2\text{O}_7^{2-}$ i) $\underline{\text{Cl}}_2\text{O}_4$

Chemistry Topic 3 – Isotopes and mass

You will remember that isotopes are elements that have differing numbers of neutrons. Hydrogen has 3 isotopes; H_1^1 , H_1^2 , H_1^3

Isotopes occur naturally, so in a sample of an element you will have a mixture of these isotopes. We can accurately measure the amount of an isotope using a **mass spectrometer**. You will need to understand what a mass spectrometer is and how it works at A level. You can read about a mass spectrometer here:

<http://bit.ly/pixlchem3>

<http://www.kore.co.uk/tutorial.htm>

<http://bit.ly/pixlchem4>

<http://filestore.aqa.org.uk/resources/chemistry/AQA-7404-7405-TN-MASS-SPECTROMETRY.PDF>

Q1. What must happen to the atoms before they are accelerated in the mass spectrometer?

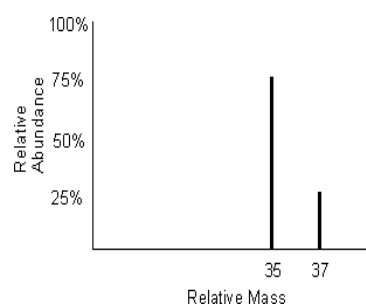
Q2. Explain why the different isotopes travel at different speeds in a mass spectrometer.

A mass spectrum for the element chlorine will give a spectrum like this:

75% of the sample consist of chlorine-35, and 25% of the sample is chlorine-37.

Given a sample of naturally occurring chlorine, $\frac{3}{4}$ of it will be Cl-35 and $\frac{1}{4}$ of it is Cl-37. We can calculate what the **mean** mass of the sample will be:

$$\text{Mean mass} = \frac{75}{100} \times 35 + \frac{25}{100} \times 37 = 35.5$$



If you look at a periodic table, this is why chlorine has an atomic mass of 35.5.

An A level periodic table has the masses of elements recorded much more accurately than at GCSE. Most elements have isotopes and these have been recorded using mass spectrometers.

GCSE

11 B boron 5	12 C carbon 6	14 N nitrogen 7	16 O oxygen 8	19 F fluorine 9
27 Al aluminium 13	28 Si silicon 14	31 P phosphorus 15	32 S sulfur 16	35.5 Cl chlorine 17

A Level

10.8 B 5 boron	12.0 C 6 carbon	14.0 N 7 nitrogen	16.0 O 8 oxygen	19.0 F 9 fluorine
27.0 Al 13 aluminium	28.1 Si 14 silicon	31.0 P 15 phosphorus	32.1 S 16 sulphur	35.5 Cl 17 chlorine

Given the percentage of each isotope you can calculate the mean mass which is the accurate atomic mass for that element.

Q3. Use the percentages of each isotope to calculate the accurate atomic mass of the following elements.

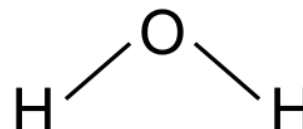
- Antimony has 2 isotopes: Sb-121 57.25% and Sb-123 42.75%
- Gallium has 2 isotopes: Ga-69 60.2% and Ga-71 39.8%
- Silver has 2 isotopes: Ag-107 51.35% and Ag-109 48.65%
- Thallium has 2 isotopes: Tl-203 29.5% and Tl-205 70.5%
- Strontium has 4 isotopes: Sr-84 0.56%, Sr-86 9.86%, Sr-87 7.02% and Sr-88 82.56%

Chemistry Topic 4 – The shapes of molecules and bonding

Have you ever wondered why your teacher drew a water molecule like this?

The lines represent a covalent bond, but why draw them at an unusual angle?

If you are unsure about covalent bonding, read about it here:



<http://bit.ly/pixlchem5>

<http://www.chemguide.co.uk/atoms/bonding/covalent.html#top>

At A level you are also expected to know how molecules have certain shapes and why they are the shape they are.

You can read about shapes of molecules here:

<http://bit.ly/pixlchem6>

<http://www.chemguide.co.uk/atoms/bonding/shapes.html#top>

Q1. Draw a dot and cross diagram to show the bonding in a molecule of aluminium chloride (AlCl₃)

Q2. Draw a dot and cross diagram to show the bonding in a molecule of ammonia (NH₃)

Q3. What is the shape and the bond angles in a molecule of methane (CH₄)?

Chemistry Topic 5 – Chemical equations

Balancing chemical equations is the stepping stone to using equations to calculate masses in chemistry.

There are loads of websites that give ways of balancing equations and lots of exercises in balancing.

Some of the equations to balance may involve strange chemicals- don't worry about that, the key idea is to get balancing right.

<http://bit.ly/pixlchem7>

<http://www.chemteam.info/Equations/Balance-Equation.html>

This website has a download; it is safe to do so:

<http://bit.ly/pixlchem8>

<https://phet.colorado.edu/en/simulation/balancing-chemical-equations>

Q5. Balance the following equations

- $\text{H}_2 + \text{O}_2 \rightarrow \text{H}_2\text{O}$
- $\text{S}_8 + \text{O}_2 \rightarrow \text{SO}_3$
- $\text{HgO} \rightarrow \text{Hg} + \text{O}_2$
- $\text{Zn} + \text{HCl} \rightarrow \text{ZnCl}_2 + \text{H}_2$
- $\text{Na} + \text{H}_2\text{O} \rightarrow \text{NaOH} + \text{H}_2$
- $\text{C}_{10}\text{H}_{16} + \text{Cl}_2 \rightarrow \text{C} + \text{HCl}$
- $\text{Fe} + \text{O}_2 \rightarrow \text{Fe}_2\text{O}_3$
- $\text{C}_6\text{H}_{12}\text{O}_6 + \text{O}_2 \rightarrow \text{CO}_2 + \text{H}_2\text{O}$
- $\text{Fe}_2\text{O}_3 + \text{H}_2 \rightarrow \text{Fe} + \text{H}_2\text{O}$
- $\text{Al} + \text{FeO} \rightarrow \text{Al}_2\text{O}_3 + \text{Fe}$

Chemistry Topic 6 – Measuring chemicals – the mole

From this point on you need to be using an A level periodic table, not a GCSE one. You can view one here:

<http://bit.ly/pixlpertab>

https://secondaryscience4all.files.wordpress.com/2014/08/filestore_aqa_org_uk_subjects_aqa-2420-w-trb-ptds_pdf.png

Now that we have our chemical equations balanced, we need to be able to use them in order to work out masses of chemicals we need or we can produce.

The **mole** is the chemists equivalent of a dozen. Atoms are so small that we cannot count them out individually, we weigh out chemicals.

For example: magnesium + sulfur → magnesium sulfide



We can see that one atom of magnesium will react with one atom of sulfur. If we had to weigh out the atoms we need to know how heavy each atom is.

From the periodic table: Mg = 24.3 and S = 32.1

If I weigh out exactly 24.3g of magnesium this will be 1 mole of magnesium. If we counted how many atoms were present in this mass it would be a huge number (6.02×10^{23} !!!!). If I weigh out 32.1g of sulfur then I would have 1 mole of sulfur atoms.

So 24.3g of Mg will react precisely with 32.1g of sulfur, and will make 56.4g of magnesium sulfide.

Here is a comprehensive page on measuring moles, there are a number of descriptions, videos and practice problems.

You will find the first 6 tutorials of most use here, and problem sets 1 to 3.

<http://bit.ly/pixlchem9>

<http://www.chemteam.info/Mole/Mole.html>

Q1. Answer the following questions on moles.

How many moles of phosphorus pentoxide (P_4O_{10}) are in 85.2g?

How many moles of potassium are in 73.56g of potassium chlorate (V) (KClO_3)?

How many moles of water are in 249.6g of hydrated copper sulfate(VI) ($\text{CuSO}_4 \cdot 5\text{H}_2\text{O}$)? For this one, you need to be aware the dot followed by $5\text{H}_2\text{O}$ means that the molecule comes with 5 water molecules so these have to be counted in as part of the molecules mass.

What is the mass of 0.125 moles of tin sulfate (SnSO_4)?

If I have 2.4g of magnesium, how many g of oxygen (O_2) will I need to react completely with the magnesium? $2\text{Mg} + \text{O}_2 \rightarrow \text{MgO}$

Chemistry Topic 7 – Solutions and concentrations

In chemistry a lot of the reactions we carry out involve mixing solutions rather than solids, gases or liquids.

You will have used bottles of acids in science that have labels saying 'Hydrochloric acid 1M', this is a solution of hydrochloric acid where 1 mole of HCl, hydrogen chloride (a gas) has been dissolved in 1dm^3 of water.

The dm^3 is a cubic decimetre, it is actually 1 litre but from this point on as an A level chemist you will use the dm^3 as your volume measurement.

<http://bit.ly/pixlchem10>

http://www.docbrown.info/page04/4_73calcs11msc.htm

Q1.

- What is the concentration (in mol dm^{-3}) of 9.53g of magnesium chloride (MgCl_2) dissolved in 100cm^3 of water?
- What is the concentration (in mol dm^{-3}) of 13.248g of lead nitrate ($\text{Pb}(\text{NO}_3)_2$) dissolved in 2dm^3 of water?
- If I add 100cm^3 of 1.00 mol dm^{-3} HCl to 1.9dm^3 of water, what is the molarity of the new solution?
- What mass of silver is present in 100cm^3 of 1mol dm^{-3} silver nitrate (AgNO_3)?
- The Dead Sea, between Jordan and Israel, contains $0.0526\text{ mol dm}^{-3}$ of Bromide ions (Br^-). What mass of bromine is in 1dm^3 of Dead Sea water?

Chemistry topic 8 – Titrations

One key skill in A level chemistry is the ability to carry out accurate titrations. You may well have carried out a titration at GCSE, at A level you will have to carry them out very precisely **and** be able to describe in detail how to carry out a titration - there will be questions on the exam paper about how to carry out practical procedures.

You can read about how to carry out a titration here, the next page in the series (page 5) describes how to work out the concentration of the unknown.

<http://bit.ly/pixlchem11>

http://www.bbc.co.uk/schools/gcsebitesize/science/triple_aqa/further_analysis/analysing_substances/revision/4/

Remember for any titration calculation you need to have a balanced symbol equation; this will tell you the ratio in which the chemicals react.

E.g. a titration of an unknown sample of sulfuric acid with sodium hydroxide.

A 25.00cm³ sample of the unknown sulfuric acid was titrated with 0.100mol dm⁻³ sodium hydroxide and required exactly 27.40cm³ for neutralisation. What is the concentration of the sulfuric acid?

Step 1: the equation $2\text{NaOH} + \text{H}_2\text{SO}_4 \rightarrow \text{Na}_2\text{SO}_4 + 2\text{H}_2\text{O}$

Step 2: the ratios 2 : 1

Step 3: how many moles of sodium hydroxide 27.40cm³ = 0.0274dm³

number of moles = c x v = 0.100 x 0.0274 = 0.00274 moles

step 4: using the ratio, how many moles of sulfuric acid

for every 2 NaOH there are 1 H₂SO₄ so, we must have 0.00274/2 = 0.00137 moles of H₂SO₄

Step 5: calculate concentration. concentration = moles/volume ← in dm³ = 0.00137/0.025 = **0.0548 mol dm⁻³**

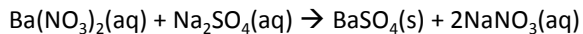
Here are some additional problems which are harder, ignore the questions about colour changes of indicators.

<http://bit.ly/pixlchem12>

<http://www.docbrown.info/page06/Mtestsnotes/ExtraVolCalcs1.htm>

Use the steps on the last page to help you.

Q1. A solution of barium nitrate will react with a solution of sodium sulfate to produce a precipitate of barium sulfate.



What volume of 0.25mol dm⁻³ sodium sulfate solution would be needed to precipitate all of the barium from 12.5cm³ of 0.15 mol dm⁻³ barium nitrate?

Chemistry Topic 9 – Organic chemistry – functional groups

At GCSE you would have come across **hydrocarbons** such as alkanes (ethane etc) and alkenes (ethene etc). You may have come across molecules such as alcohols and carboxylic acids. At A level you will learn about a wide range of molecules that have had atoms added to the carbon chain. These are called functional groups, they give the molecule certain physical and chemical properties that can make them incredibly useful to us.

Here you are going to meet a selection of the functional groups, learn a little about their properties and how we give them logical names.

You will find a menu for organic compounds here:

<http://bit.ly/pixlchem13>

<http://www.chemguide.co.uk/orgpropsmenu.html#top>

And how to name organic compounds here:

<http://bit.ly/pixlchem14>

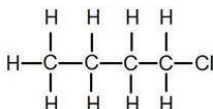
<http://www.chemguide.co.uk/basicorg/conventions/names.html#top>

Using the two links see if you can answer the following questions:

Q1. Halogenoalkanes

a. What is the name of this halogenoalkane?

b. How could you make it from butan-1-ol?



Q2. Alcohols

a. How could you make ethanol from ethene?

b. How does ethanol react with sodium and in what ways is this a) similar to the reaction with water, b) different to the reaction with water?

Q3. Aldehydes and ketones

a. Draw the structures of a) propanal, b) propanone

b. How are these two functional groups different?

Chemistry Topic 10 – Acids, bases, pH

At GCSE you will know that an acid can dissolve in water to produce H^+ ions, at A level you will need a greater understanding of what an acid or a base is.

Read the following page and answer the questions

<http://bit.ly/pixlchem15>

<http://www.chemguide.co.uk/physical/acidbaseeqia/theories.html#top>

Q1. What is your new definition of what an acid is?

Q2. How does ammonia (NH_3) act as a base?

<http://bit.ly/pixlchem16>

<http://www.chemguide.co.uk/physical/acidbaseeqia/acids.html#top>

Q3 Ethanoic acid (vinegar) is a weak acid, what does this mean?

Q4 What is the pH of a solution of 0.01 mol dm^{-3} of the strong acid, hydrochloric acid?

If you are on holiday in the UK, or on a staycation at home, why not plan a day trip to one of these :

Glasgow Science
Centre - Glasgow

Dundee Science
Centre - Dundee

W5 - Belfast

Colour Experience -
Bradford

Catalyst Discovery
Centre - Widnes

Black Country Living
Museum - Dudley

Cambridge Science
Centre - Cambridge

Think-tank -
Birmingham

The Whipple
Museum -
Cambridge

National Museum -
Cardiff

The Faraday Museum
- London

Bristol Science
Centre - Bristol

Science on Social Media

Science communication is essential in the modern world and all the big scientific companies, researchers and institutions have their own social media accounts. Here are some of our top tips to keep up to date with developing news or interesting stories:

Follow on Twitter:

Salters' Institute - Our activities include Festivals of Chemistry; Chemistry Camps; Curricula; Awards for Technicians, Graduates, A Level Students; and Seminars

@salters_inst

Daily A Level Chemistry Facts – Daily Chemistry Facts (Based on the A-Level AQA spec but most facts work with all)

@chemAlevels

Chemistry News –The latest chemistry news from only the best sources

@chemistrynews

Compound Interest– Graphics exploring everyday #chemistry. Winner of @absw 2018 science blog award

@compoundchem

Chemistry World – Chemistry magazine bringing you the latest chemistry news and research every day. Published by the Royal Society of Chemistry.

@ChemistryWorld

Royal Society of Chemistry - Promote, support and celebrate chemistry. Follow for updates on latest activities

@RoySocChem

Periodic Videos– Chemistry video series by @BradyHaran & profs at the Uni of Nottingham - also see @sixtysymbols & @numberphile

@periodicvideos



Find on Facebook:

Science Now - Science Now is a dedicated community that helps spread science news in all fields, from physics to biology, medicine to nanotechnology, space and beyond!

National Science Foundation – As an independent federal agency, NSF fund a significant proportion of basic research. For official source information about NSF, visit www.nsf.gov

Science News Magazine - Science covers important and emerging research in all fields of science

BBC Science News - The latest BBC Science and Environment News: breaking news, analysis and debate on science and nature around the world

Scientific American - Scientific American is the authority on science and technology for a general audience, with coverage that explains how research changes our understanding of the world and shapes our lives.



Science Websites

These websites all offer an amazing collection of resources that you should use again and again through out your course.

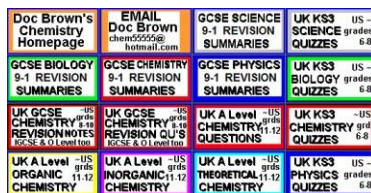
chemguide

Helping you to understand Chemistry

MAIN MENU

This website is very detailed and identifies other resources which are sharing incorrect or outdated information and suggests the correct materials to use. The site also contains links to the syllabuses of many exam boards which means it is accessible and useful to all students.

<https://www.chemguide.co.uk/>



Doc Brown is a website dedicated to all three science subjects; physics, chemistry and biology. It provides the user with summarised notes (useful for making flash cards) and practice questions to further their knowledge and understanding.

The site provides resources from a wide range of exam boards including AQA, Edexcel, Chemistry, CCEA, OCR, WJEC, CIE and Salters from GCSE level to A2.

<http://www.docbrown.info/>

chemrevise

Resources for A-level and GCSE Chemistry

HOME 1. AQA REVISION GUIDES 2. OCR REVISION GUIDES
5. A-LEVEL TEXTBOOK 6. GCSE AQA GUIDES ABOUT

Updates to A-level Textbook

The site was first made to host revision guides that are written for AQA A-level Chemistry. These revision guides have already been circulating on the internet for a couple of years on places like student room. This will be the place for the most up to date versions of them. The site has now extended to cover other exam boards. (OCR and Edexcel)

<https://chemrevise.org/>



The free revision website for students studying GCSE and A-levels. S-cool provides revision guides, question banks, revision timetable and more

<https://www.s-cool.co.uk/a-level/chemistry>



Tons of awesome courses in one awesome channel! Check out the playlists for past courses in physics, philosophy, games, economics, U.S. government and politics, astronomy, anatomy & physiology, world history, biology, literature, ecology, chemistry, psychology, and of course, chemistry!

<https://www.youtube.com/user/crashcourse/featured>

Science: Things to do!

Day 4 of the holidays and boredom has set in?

There are loads of citizen science projects you can take part in either from the comfort of your bedroom, out and about, or when on holiday. Wikipedia does a comprehensive list of all the current projects taking place. Google 'citizen science project'

MOOC

Want to stand above the rest when it comes to UCAS? Now is the time to act.

MOOCs are online courses run by nearly all universities. They are short **FREE** courses that you take part in. They are usually quite specialist, but aimed at the public, not the genius!

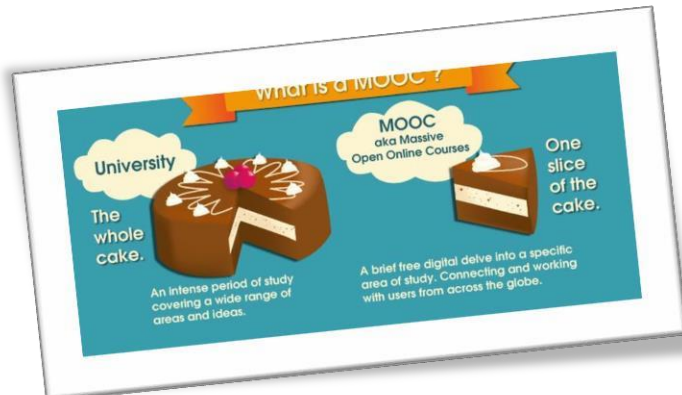
There are lots of websites that help you find a course, such as edX and Future learn.

You can take part in any course, but there are usually start and finish dates.

They mostly involve taking part in web chats, watching videos and interactives.



Completing a MOOC will look great on your Personal statement and they are dead easy to take part in!



A Level chemistry Transition Baseline Assessment

The following 40 minute test is designed to test your recall, analysis and evaluative skills and knowledge.

Remember to use your exam technique: look at the command words and the number of marks each question is worth.

A suggested mark scheme is provided for you to check your answers.

All data is given on this paper, you will not need a periodic table

Answer all questions.

1. Here is part of a periodic table, use it to answer the following questions

10.8 B 5 boron	12.0 C 6 carbon	14.0 N 7 nitrogen	16.0 O 8 oxygen	19.0 F 9 fluorine	20.2 Ne 10 neon
27.0 Al 13 aluminium	28.1 Si 14 silicon	31.0 P 15 phosphorus	32.1 S 16 sulphur	35.5 Cl 17 chlorine	39.9 Ar 18 argon

- a. Which is the correct electron configuration for a nitrogen atom, circle the correct answer

[1]

$1s^2 2p^5$ $1s^1 2p^6$ $1s^2 2s^2 2p^3$ $1s^2 2s^5$ $1s^2 2s^2 2p^6 3s^2 3p^2$

- b. Which is the correct electron configuration for a chlorine atom, circle the correct answer

[1]

$1s^2 2s^6 2p^7$ $1s^2 2s^2 2p^6 2d^5$ $1s^2 2s^2 2p^6 3d^7$ $1s^2 2s^2 2p^6 3p^7$ $1s^2 2s^2 2p^6 3s^2 3p^5$

- c. Which is the correct electron configuration for an aluminium ion, Al^{3+} ? Circle the correct answer

[1]

$1s^2 2s^2 2p^6$ $1s^2 2s^2 2p^6 3s^2 3p^3$ $1s^2 2s^2 2p^6 3s^2$ $1s^2 2s^2 2p^6 2d^1$

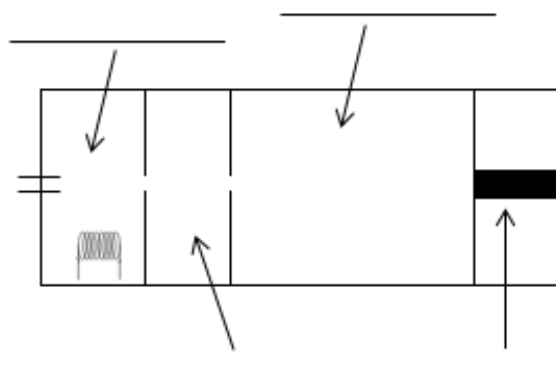
2. Draw a dot and cross diagram to show the bonding in a molecule of water, H_2O .

[2]

Atomic numbers: H =1, O =8

3. A time of flight mass spectrometer has 4 main stages put the correct stage in the diagram below:

Drift region Ionisation Detector Acceleration



[4]

4. A mass spectrometer was used to analyse a sample of chlorine; the results of the analysis are as follows:

isotope mass	% of sample
Cl-35	75.53
Cl-37	24.47

Calculate the accurate atomic mass of chlorine. Give your answer to **3 decimal places**.

[3]

mass: _____

5. Give the oxidation state of the underlined atom in the following chemicals.

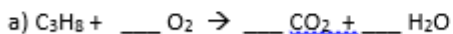
Useful information: H = +1, K = +1, Na = +1, Mg = +2, O = -2, Cl = -1

[7]

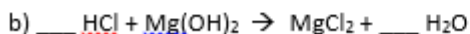
a) CO₂ b) SO₃ c) H₂SO₄ d) AlCl₃

e) Cr₂O₃ f) NaNO₃ g) VCl₄

6. Balance the following chemical equations:



[3]



[2]



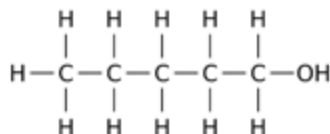
[3]

7. Calculate the relative formula masses of the following:

Atomic masses: H = 1, O = 16, S = 32.1, C = 12, Ca = 40.1, Na = 23, Cl = 35.5, Zn = 65.4

- a) CaCl_2 b) H_2CO_3 c) Na_2SO_4 d) $\text{C}_3\text{H}_7\text{OH}$ e) $\text{Zn}(\text{NO}_3)_2$ [5]

8. A student carried out a reaction with this molecule:



- a. What is the name of this molecule? _____ [2]

9. Vinegar is a solution of ethanoic acid (CH_3COOH) in water. A student carried out a titration of a sample of vinegar.

He used a pipette to measure exactly 25.0cm^3 of vinegar into a flask, added an indicator and titrated it with a 1.00 mol dm^{-3} solution of sodium hydroxide (NaOH).

The reaction is:



The student found that his average titration was 27.50cm^3

$c = n/v$ c = concentration (mol dm^{-3}), n = number of moles, v = volume (dm^3)

$n = m/R_{\text{fm}}$ n = number of moles, m = mass in grams, R_{fm} = formula mass

$1\text{dm}^3 = 1000\text{ cm}^3$

- a. Using the chemical equation, how many moles of sodium hydroxide will react with 1 mole of ethanoic acid?

_____ moles [1]

- b. How many moles of sodium hydroxide are in 27.50cm^3 of 1.00 mol dm^{-3} sodium hydroxide?

_____ moles [2]

- c. How many moles of ethanoic acid are in 25.0cm^3 of the vinegar sample?

_____ moles [1]

- d. How many moles of ethanoic acid are in 1dm^3 of vinegar?

_____ moles [1]

- e. Ethanoic acid has a formula mass of 48. What mass of ethanoic acid is present in 1dm^3 of vinegar?

_____ g [2]

Pre-Knowledge Topics Answers to problems

Q1.

- | | | |
|--------------------------------------------|-------------------------------------------------|--------------------------------------------|
| a) $1s^2 2s^2 2p^6 3s^2 3p^6 4s^2$ | b) $1s^2 2s^2 2p^6 3s^2 3p^1$ | c) $1s^2 2s^2 2p^6 3s^2 3p^4$ |
| d) $1s^2 2s^2 2p^6 3s^2 3p^5$ | e) $1s^2 2s^2 2p^6 3s^2 3p^6$ | f) $1s^2 2s^2 2p^6 3s^2 3p^6 3d^6 4s^2$ |
| g) $1s^2 2s^2 2p^6 3s^2 3p^6 3d^3 4s^2$ | h) $1s^2 2s^2 2p^6 3s^2 3p^6 3d^8 4s^2$ | j) $1s^2 2s^2 2p^6 3s^2 3p^6 3d^{10} 4s^1$ |
| j) $1s^2 2s^2 2p^6 3s^2 3p^6 3d^{10} 4s^2$ | k) $1s^2 2s^2 2p^6 3s^2 3p^6 4s^2 3d^{10} 4p^3$ | |

Q2

- | | | |
|-------------------------------|------------------------------------|---------------------------------------|
| a) $1s^2 2s^2 2p^6 3s^2 3p^6$ | b) $1s^2 2s^2 2p^6 3s^2 3p^6$ | c) $1s^2 2s^2 2p^6 3s^2 3p^6 3d^{10}$ |
| d) $1s^2 2s^2 2p^6 3s^2 3p^6$ | e) $1s^2 2s^2 2p^6 3s^2 3p^6 3d^7$ | |

Q1

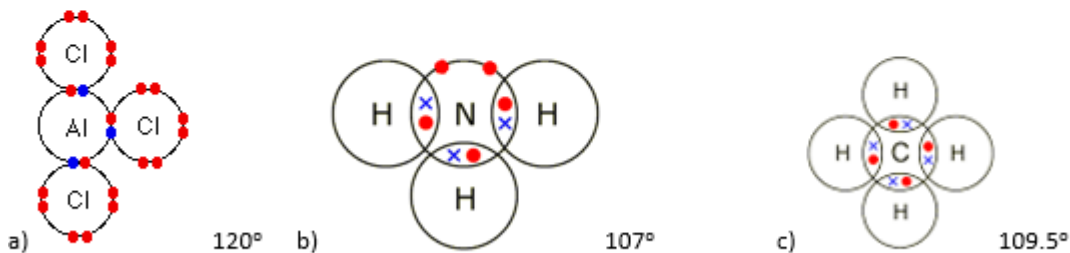
- a) +4 b) +6 c) +5 d) +4 e) +3 f) +5 g) +7 h) +6 j) +4

Q1 They must be ionised / turned into ions

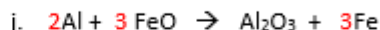
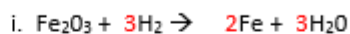
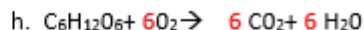
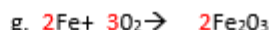
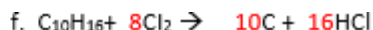
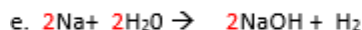
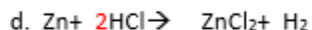
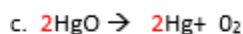
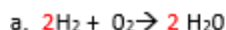
Q2 The ions are all given the same amount of kinetic energy, as $KE = \frac{1}{2}mv^2$ the lighter ions will have greater speed / heavier ions will have less speed.]

- Q3 a) 121.855 b) 67.796 c) 107.973 d) 204.41 e) 87.710 / 87.7102

Q1



Q1



Q1

a) $85.2/284 = 0.3 \text{ moles}$

b) $73.56/122.6 = 0.6 \text{ moles}$

c) $249.5/249.5 = 1.0 \text{ moles}$

d) $0.125 \times 212.8 = 26.6\text{g}$

e) $2\text{Mg} : 2\text{O}$ or 1:1 ratio 2.4g of $\text{Mg} = 0.1\text{moles}$ so we need $0.1 \text{ moles of oxygen } (\text{O}_2): 0.1 \times 32 = 3.2\text{g}$

Q1

a) $9.53\text{g}/95.3 = 0.1 \text{ moles}$, in 100cm^3 or 0.1dm^3 in 1dm^3 $0.1\text{moles}/0.1\text{dm}^3 = 1.0 \text{ mol dm}^{-3}$

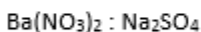
b) $13.284\text{g}/331.2 = 0.04 \text{ moles}$, in 2dm^3 in 1dm^3 $0.04\text{moles}/2\text{dm}^3 = 0.02 \text{ mol dm}^{-3}$

c) 100cm^3 of $0.1 \text{ mol dm}^{-3} = 0.01 \text{ moles}$ added to a total volume of $2 \text{ dm}^3 = 0.01\text{moles}/2\text{dm}^3 = 0.005 \text{ mol dm}^{-3}$

d) in 1dm^3 of 1 mol dm^{-3} silver nitrate, $1 \text{ mole of Ag} = 107.9\text{g}$ in $0.1\text{dm}^3 = 107.9 \times 0.1 = 10.79\text{g}$

e) $0.0526 \times 79.7 = 42.0274\text{g}$

Q1



1 : 1 ratio

12.5cm^3 of $\text{Ba}(\text{NO}_3)_2 = 0.0125\text{dm}^3$

$0.15 \text{ mol dm}^{-3} \times 0.0125\text{dm}^3 = 0.001875 \text{ moles}$

same number of moles of sodium sulfate needed, which has a concentration of 0.25 mol dm^{-3}

$0.001875 \text{ moles} / 0.25 \text{ mol dm}^{-3} = 0.0075 \text{ dm}^3$ or 7.5cm^3

Q1 1-chlorobutane

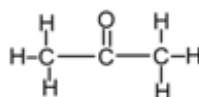
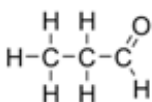
Add butan-1-ol to concentrated HCl and shake

Q2 React ethene with hydrogen gas at high temperature and pressure with a nickel catalyst

The reaction is similar in that it releases hydrogen but different as it proceeds much slower than in water

Q3 propanal

propanone

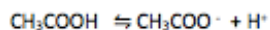


The carbon atom joined to oxygen in propanal has a hydrogen attached to it, it does not in propanone.

10.1 An acid is a proton donor

10.2 Ammonia can accept a proton, to become NH_4^+

10.3 ethanoic acid has not fully dissociated, it has not released all of its hydrogen ions into the solution.



Mostly this Very few of these

10.4 $\text{pH} = -\log [0.01] = 2$ The pH = 2

Suggested Mark Scheme:

Chemistry A level transition - baseline assessment. - Answers

1. .

- a. Which is the correct electron configuration for a nitrogen atom, circle the correct answer [1]

$1s^2 2p^5$ $1s^1 2p^6$ $1s^2 2s^2 2p^3$ $1s^2 2s^5$ $1s^2 2s^2 2p^6 3s^2 3p^2$

- b. Which is the correct electron configuration for a chlorine atom, circle the correct answer [1]

$1s^2 2s^8 2p^7$ $1s^2 2s^2 2p^8 2d^5$ $1s^2 2s^2 2p^6 3d^7$ $1s^2 2s^2 2p^6 3p^7$ $1s^2 2s^2 2p^6 3s^2 3p^5$

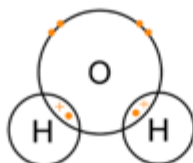
- c. Which is the correct electron configuration for an aluminium ion, Al^{3+} ? Circle the correct answer [1]

$1s^2 2s^2 2p^6$ $1s^2 2s^2 2p^6 3s^2 3p^3$ $1s^2 2s^2 2p^6 3s^2$ $1s^2 2s^2 2p^6 2d^1$

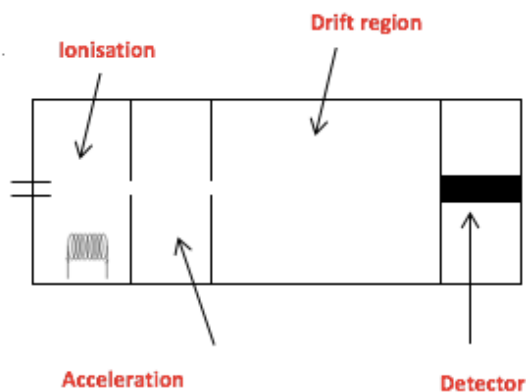
2. Draw a dot and cross diagram to show the bonding in a molecule of water, H_2O . [2]
Atomic numbers: H = 1, O = 8

1 mark for 2 x shared electrons

1 mark for lone pairs



3. A time of flight mass spectrometer has 4 main stages put the correct stage in the diagram below:



[4]

4. A mass spectrometer was used to analyse a sample of chlorine, the results of the analysis are as follows:

isotope mass	% of sample
Cl-35	75.53
Cl-37	24.47

$$(35 \times 75.53) + (37 \times 24.47) / 100 \quad [1]$$

$$= 35.4894 \quad [1]$$

To 3dp = 35.489 [1] [2 marks if above line is missing]

[3]

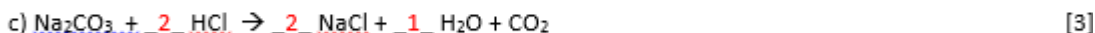
5. Give the oxidation state of the underlined atom in the following chemicals.

Useful information: H = +1, K = +1, Na = +1, Mg = +2, O = -2, Cl = -1

[7]

- a) $\underline{\text{C}}$ O₂ **+4** b) $\underline{\text{S}}$ O₃ **+6** c) H₂ $\underline{\text{S}}$ O₄ **+6** d) $\underline{\text{Al}}$ Cl₃ **+3**
e) $\underline{\text{Cr}}$ ₂O₃ **+3** f) Na $\underline{\text{N}}$ O₃ **+5** g) $\underline{\text{V}}$ Cl₄ **+4**

6. Balance the following chemical equations:

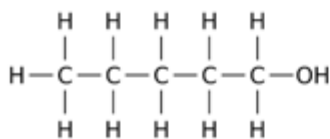


7. Calculate the relative formula masses of the following:

Atomic masses: H = 1, O = 16, S = 32.1, C = 12, Ca = 40.1, Na = 23, Cl = 35.5

- a) CaCl₂ b) H₂CO₃ c) Na₂SO₄ d) C₃H₇OH e) $\underline{\text{Zn}}$ (NO₃)₂ [5]
111.1 62 142.3 60 189.4

8. A student carried out a reaction with this molecule:



- a. What is the name of this molecule? pentan-1-ol [2]

Pentanol = 1 mark

pentan-1-ol = 2 marks

- 9.

- a. Using the chemical equation, how many moles of sodium hydroxide will react with 1 mole of ethanoic acid?

1 moles [1]

- b. How many moles of sodium hydroxide are in 27.50cm³ of 1.00 moldm⁻³ sodium hydroxide?

27.5/1000 [1] x 1.00 = 0.0275 [1]

0.0275 [2] moles [2]

- c. How many moles of ethanoic acid are in 25.0cm³ of the vinegar sample?

0.0275 moles [1]

d. How many moles of ethanoic acid are in 1dm³ of vinegar?

$$0.0275 \times 1000/25 = 1.10$$

____1.10____ moles [1]

e. Ethanoic acid has a formula mass of 48. What mass of ethanoic acid is present in 1dm³ of vinegar?

$$1.1 \times 48 = 52.8\text{g}$$

____52.8g____ g [1]



© The PiXL Club Ltd. June 2018

This resource is strictly for the use of member schools for as long as they remain members of The PiXL Club. It may not be copied, sold, or transferred to a third party or used by the school after membership ceases. Until such time it may be freely used within the member school.

All opinions and contributions are those of the authors. The contents of this resource are not connected with, or endorsed by, any other company, organisation or institution.

PiXL Club Ltd endeavour to trace and contact copyright owners. If there are any inadvertent omissions or errors in the acknowledgements or usage, this is unintended and PiXL will remedy these on written notification.